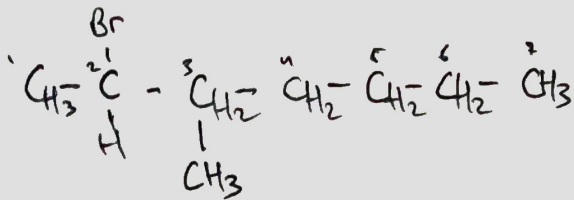


Kuis 1 KD (alkana)

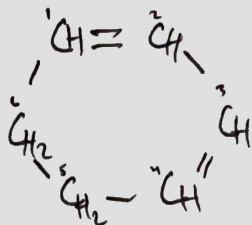
Ardian Febrianto / 10519019

Tuliskan rumus struktur senyawa berikut.

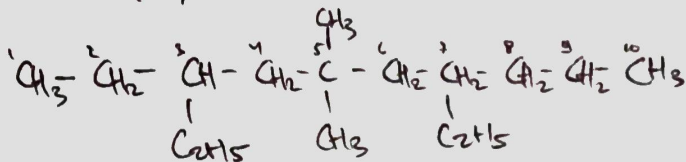
1. 2-bromo-3-metilheptana



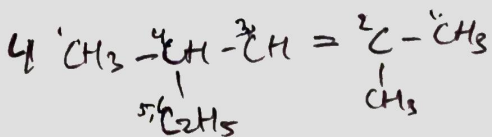
2. 1,3-sikloheksadiena



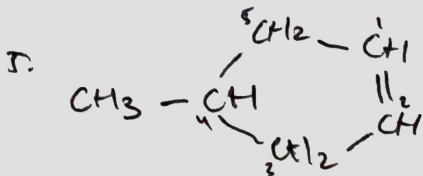
3. 3-ethyl-2,5-dimetil-7-etiloktana



Beri nama senyawa berikut



2,4-dimetil-2-heksena



4-metil-1-siklopentena